


LEVEL 6 WRITTEN TEST

Student Name _____ Teacher Code _____ Room Number _____

1. Scale and Chords (12 points total)

_____ a. Write the ascending scale in the clef using whole notes. Use accidentals (sharps or flats) *or* write the key signature. (8 points)




_____ b. Write the **I, IV, and V** (for Major) or **i, iv, and V** (for minor) chords in root position over the proper notes of the scale. (3 points)

_____ c. Label the chords with Roman numerals. (1 point)


2. Intervals (4 points)

Write each interval above the given note.




3. Chord Qualities (4 points)

Write the triads above the given notes.




4. Chord Positions (3 points)

Write the triads in the positions indicated.



5. Major Key Signatures

(4 points) Name each Major key.



_____ Major _____ Major _____ Major _____ Major

_____ Total points for this page (27 points)