


LEVEL 5 WRITTEN TEST

Student Name _____ Teacher Code _____ Room Number _____

1. Scale and Chords (11 points total)

_____ a. Write the ascending _____ scale in the _____ clef using whole notes. Use accidentals (sharps or flats) or write the key signature. (8 points)

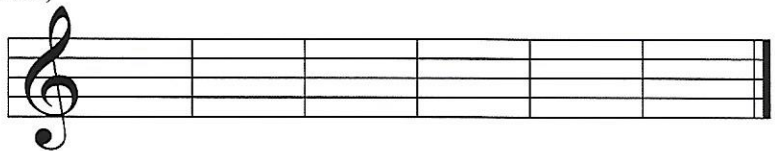


_____ b. Write the **I and V** (for Major) or **i and V** (for minor) chords in root position over the proper notes of the scale. (2 points)

_____ c. Label the chords as **I and V** or **i and V**. (1 point)


2. Intervals (6 points)

Write each interval above the given note. Use accidentals where they are needed.




3. Root Identification (5 points)

Name the root of each triad. Notice the clef sign.



4. Key Signature (7 points)

Write the seven _____ in order on the _____ staff.



_____ 5. **Terms and Signs** (9 points) Match the definition with the correct term or sign.

_____ **Total points for this page (38 points)**