


LEVEL 4 WRITTEN TEST

Student Name _____ Teacher Code _____ Room Number _____

1. Scale (6 points total)

_____ **a.** Draw a treble clef on the staff. (1 point)




_____ **b.** Write the ascending A harmonic minor scale. Use whole notes. Add the correct # or b or natural sign to the scale. (4 points)


a. treble clef b. scale - ascending c. i chord

_____ **c.** Write the A minor i chord. (1 point)


2. Stem Placement (4 points) Add stems to these whole notes to make them half notes.



3. Intervals (5 points) Write the intervals above the given notes.



4. Triads (5 points) Name the root, third or fifth of the triads. Notice the clef.



5. Terms and Signs (7 points) Match the definition or sign with the correct term.

_____ **Total points from this page (27 points)**