


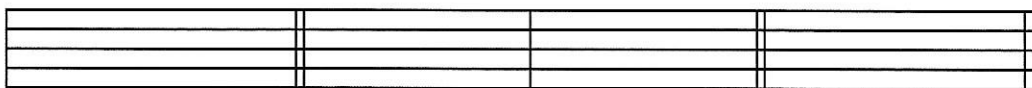
LEVEL 11 WRITTEN TEST

Student Name _____ Teacher Code _____ Room Number _____


____ 1. Scale (1 pt)
Add accidentals to create a
scale in _____ mode.




____ 2. Intervals (4 pts)
Write the intervals below the
given notes.



____ 3. Pop Chord Symbols
(3 pts)
Write the chords.




____ 4. Secondary Dominant
Chords (3 pts)
Identify each secondary
dominant chord using Roman
numerals and figured bass.



____ 5. Transposition (3 pts)
Transpose this melody
_____ on the staff below.
Write the new key signature and
copy the time signature.

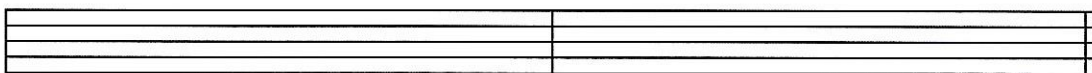


____ (1 pt) key signature



____ (2 pts) transposition

____ 6. Rhythm (2 pts)
Write one rest in each box
to complete the measures.



____ Total points from this page (16 points)